



NARIŠI IN IZRAČUNAJ!


$15 - 4 = \underline{11}$




$65 - 4 = \underline{61}$



$18 - 3 = \underline{\quad}$



$48 - 3 = \underline{\quad}$



$14 - 2 = \underline{\quad}$

$84 - 2 = \underline{\quad}$

$19 - 5 = \underline{\quad}$

$79 - 5 = \underline{\quad}$