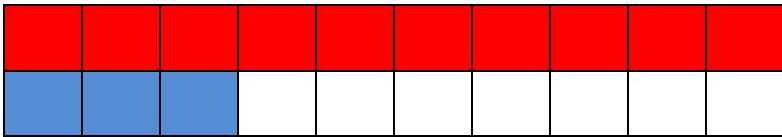


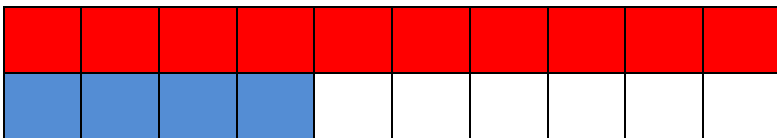
SEŠTEVAMO OD 10 DO 20

➤ PREŠTEJ KOLIKO JE RDEČIH KOCK IN KOLIKO JE MODRIH KOCK. NARIŠI, POBARVAJ V KARO MAT. ZVEZEK.

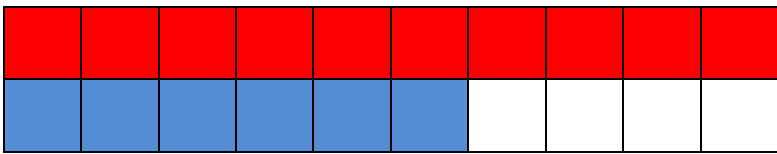
➤ KOLIKO JE VSEH KOCK SKUPAJ? POD VSAK PRIKAZ V ZVEZEK ZAPIŠI RAČUN IN IZREČUNAJ.



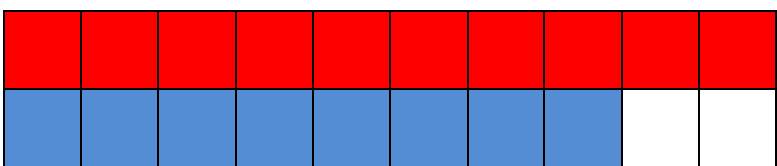
$$10 + 3 = 13$$




$$10 + 4 = \underline{\quad}$$




$$10 + \underline{\quad} = \underline{\quad}$$



$$\underline{\quad} + \underline{\quad} = \underline{\quad}$$



$$\underline{\quad} + \underline{\quad} = \underline{\quad}$$



$$\underline{\quad} + \underline{\quad} = \underline{\quad}$$