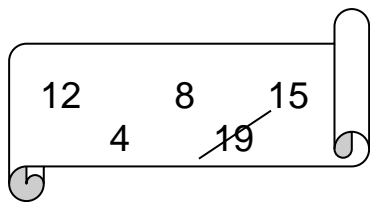
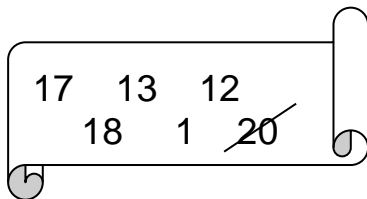


➤ **NALOGE OPRAVI V MATEMATIČNI KARO ZVEZEK!**
NALOGE OŠTEVILČI,


1. UREDI ŠTEVILA PO VELIKOSTI! V ZVEZEK ZAPISUJ SAMO REŠITVE




19, _____




20, _____



8, _____


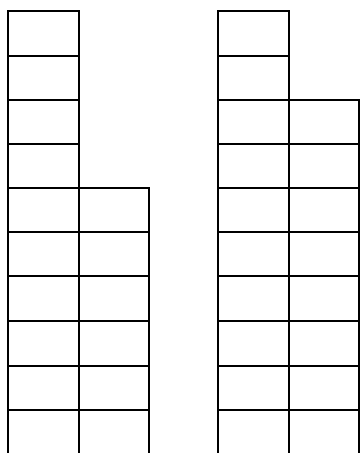


5, _____



9, _____

2. PREPIŠI IN VSTAVI <, > ALI =.



15 < 18

19 ___ 17

13 ___ 13

10 ___ 20

20 ___ 14

16 ___ 16

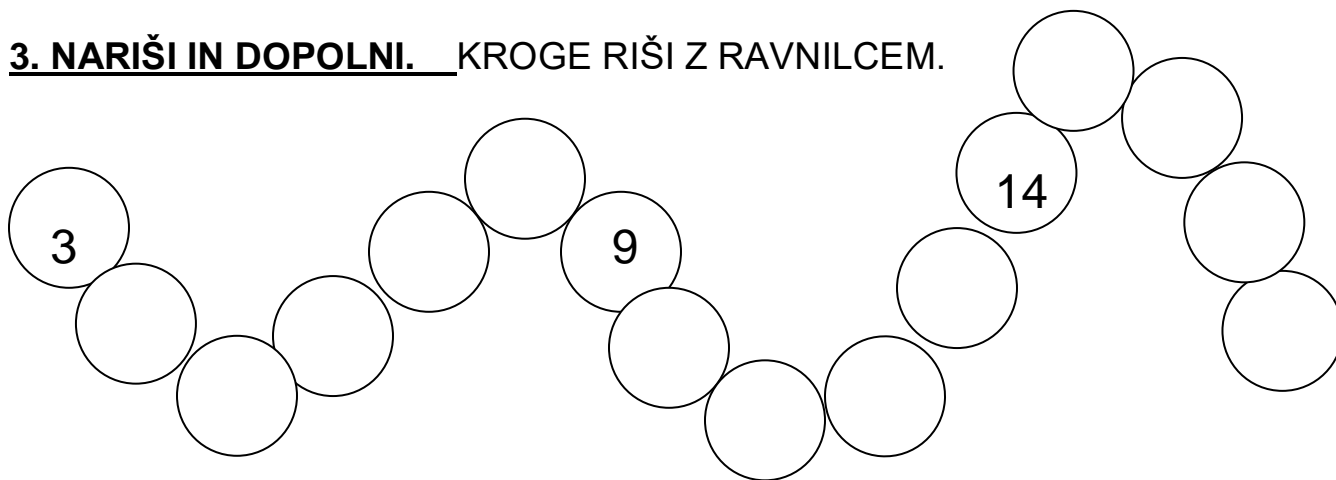
15 ___ 5

7 ___ 19

14 ___ 17

18 ___ 11

3. NARIŠI IN DOPOLNI. KROGE RIŠI Z RAVNILCEM.



4. VPIŠI PREDHODNIK IN NASLEDNIK ŠTEVILOM

	15	
	12	
	9	
	18	
	10	
	4	
	14	
	19	
	2	